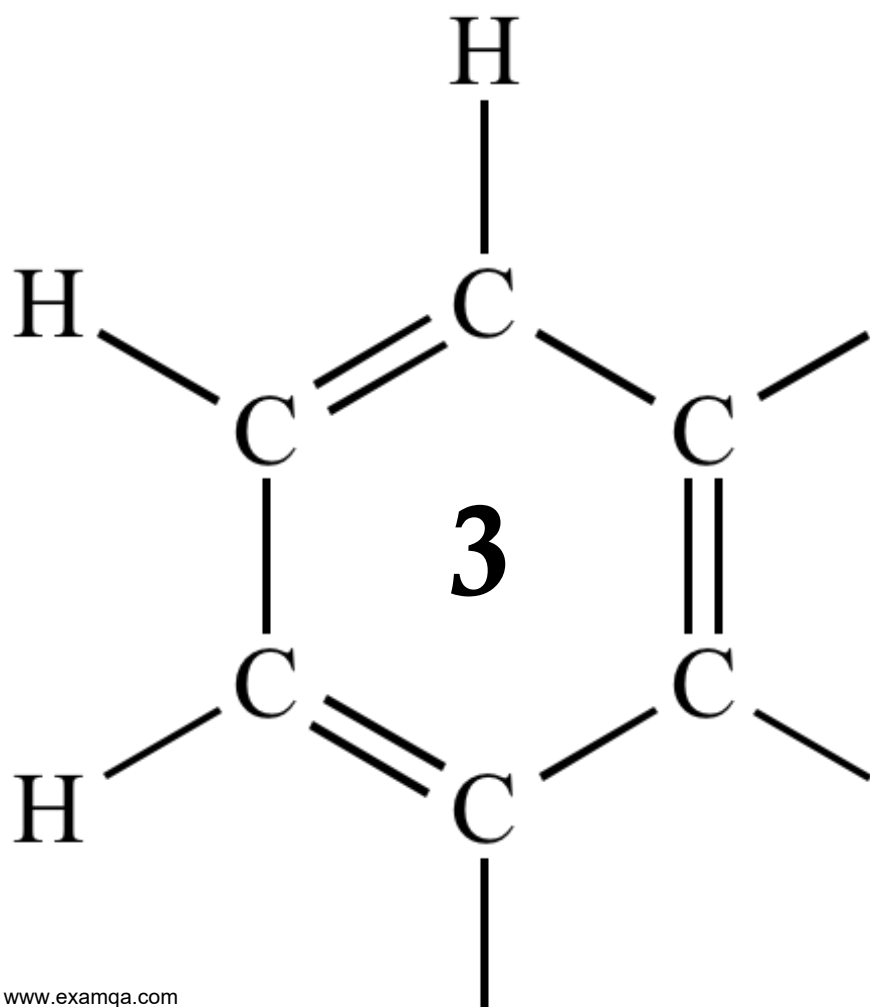


OCR A2 CHEMISTRY

MODULE 5.3

ACIDS – BASES – pH



1

Ammonia and ethylamine are examples of weak Brønsted–Lowry bases.

(a) State the meaning of the term *Brønsted–Lowry base*.

.....
.....

(1)

(b) (i) Write an equation for the reaction of ethylamine ($\text{CH}_3\text{CH}_2\text{NH}_2$) with water to form a weakly alkaline solution.

.....
.....

(1)

(ii) In terms of this reaction, state why the solution formed is **weakly** alkaline.

.....
.....

(1)

(c) State which is the stronger base, ammonia or ethylamine. Explain your answer.

Stronger base

Explanation

.....
.....
.....

(Extra space)

.....

(3)

(d) Give the formula of an organic compound that forms an alkaline buffer solution when added to a solution of ethylamine.

.....

(1)

- (e) Explain qualitatively how the buffer solution in part (d) maintains an almost constant pH when a small amount of hydrochloric acid is added to it.

.....
.....
.....
.....

(Extra space)

.....

(2)
(Total 9 marks)

2

This question involves calculations about two strong acids and one weak acid. All measurements were carried out at 25 °C.

- (a) A 25.0 cm³ sample of 0.0850 mol dm⁻³ hydrochloric acid was placed in a beaker and 100 cm³ of distilled water were added. Calculate the pH of the new solution formed. Give your answer to 2 decimal places.

.....
.....
.....
.....

(Extra space)

.....

(2)

- (b) HX is a weak monobasic acid.

- (i) Write an expression for the acid dissociation constant, K_a , for HX.

.....
.....

(1)

- (ii) The pH of a $0.0850 \text{ mol dm}^{-3}$ solution of HX is 2.79
Calculate a value for the acid dissociation constant, K_a , of this acid.
Give your answer to 3 significant figures.

.....

.....

.....

.....

.....

.....

.....

.....

(Extra space)

.....

.....

.....

(3)

- (c) A 25.0 cm³ sample of 0.620 mol dm⁻³ nitric acid was placed in a beaker and 38.2 cm³ of 0.550 mol dm⁻³ aqueous sodium hydroxide were added.
Calculate the pH of the solution formed.
Give your answer to 2 decimal places.

The ionic product of water $K_w = 1.00 \times 10^{-14} \text{ mol}^2 \text{ dm}^{-6}$ at 25 °C.

.....
.....
.....
.....
.....
.....
.....
.....
.....
.....
.....

(Extra space)

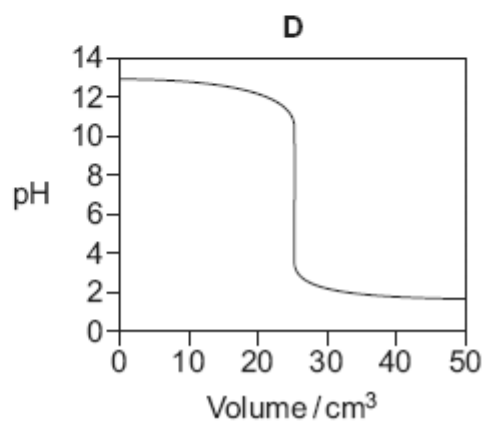
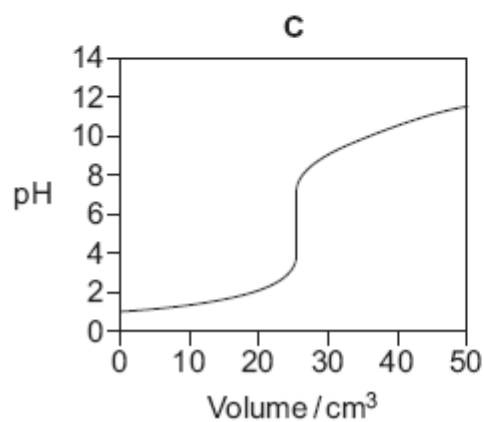
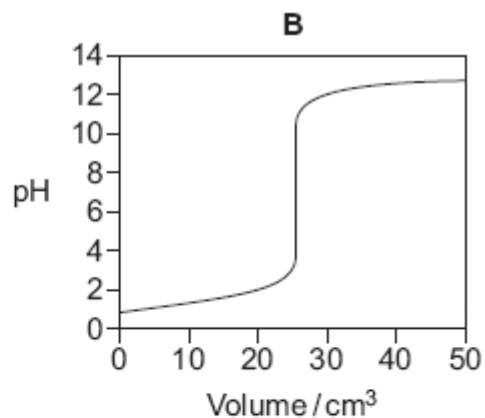
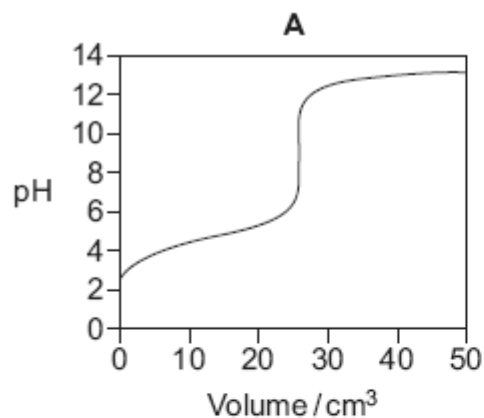
.....
.....
.....
.....
.....
.....

(6)
(Total 12 marks)

3

Titration curves labelled **A**, **B**, **C** and **D** for combinations of different aqueous solutions of acids and bases are shown below.

All solutions have a concentration of 0.1 mol dm^{-3} .



(a) In this part of the question write the appropriate letter in each box.

From the curves **A**, **B**, **C** and **D**, choose the curve produced by the addition of

ammonia to 25 cm^3 of hydrochloric acid

sodium hydroxide to 25 cm^3 of ethanoic acid

nitric acid to 25 cm^3 of potassium hydroxide

(3)

- (b) A table of acid-base indicators is shown below. The pH ranges over which the indicators change colour and their colours in acid and alkali are also shown.

Indicator	pH range	Colour in acid	Colour in alkali
Thymolphthalein	1.3 – 3.0	red	yellow
Bromocresol green	3.8 – 5.4	yellow	blue
Cresol purple	7.6 – 9.2	yellow	purple
Alizarin yellow	10.1 – 12.0	yellow	orange

- (i) Select from the table an indicator that could be used in the titration that produces curve **B** but **not** in the titration that produces curve **A**.

.....

(1)

- (ii) Give the colour change at the end point of the titration that produces curve **D** when cresol purple is used as the indicator.

.....

(1)

(Total 5 marks)

4

This question is about the pH of some solutions containing potassium hydroxide and ethanoic acid.

Give all values of pH to 2 decimal places.

- (a) (i) Write an expression for pH.

.....

(1)

- (ii) Write an expression for the ionic product of water, K_w

.....

(1)

- (iii) At 10 °C, a 0.154 mol dm⁻³ solution of potassium hydroxide has a pH of 13.72. Calculate the value of K_w at 10 °C.

.....
.....
.....
.....
(Extra space)
.....
.....

(2)

- (b) At 25 °C, the acid dissociation constant K_a for ethanoic acid has the value 1.75 × 10⁻⁵ mol dm⁻³.

- (i) Write an expression for K_a for ethanoic acid.

.....
.....

(1)

- (ii) Calculate the pH of a 0.154 mol dm⁻³ solution of ethanoic acid at 25 °C.

.....
.....
.....
.....
.....
.....
(Extra space)
.....
.....

(3)

(c) At 25 °C, the acid dissociation constant K_a for ethanoic acid has the value $1.75 \times 10^{-5} \text{ mol dm}^{-3}$.

(i) Calculate the pH of the solution formed when 10.0 cm³ of 0.154 mol dm⁻³ potassium hydroxide are added to 20.0 cm³ of 0.154 mol dm⁻³ ethanoic acid at 25 °C.

.....

.....

.....

.....

.....

.....

.....

.....

.....

(Extra space)

.....

.....

.....

(4)

- (ii) Calculate the pH of the solution formed when 40.0 cm³ of 0.154 mol dm⁻³ potassium hydroxide are added to 20.0 cm³ of 0.154 mol dm⁻³ ethanoic acid at 25 °C.

At 25 °C, K_w has the value 1.00×10^{-14} mol² dm⁻⁶.

.....

.....

.....

.....

.....

.....

.....

.....

.....

.....

.....

(Extra space)

.....

.....

.....

(4)
(Total 16 marks)

5

When iron(II) sulfate is used for killing weeds in lawns, it is often mixed with the fertiliser ammonium sulfate. Ammonium sulfate also makes the soil acidic.

- (a) Write an equation to show how the ammonium ion behaves as a Brønsted–Lowry acid in water.

.....

(1)

- (b) Compounds such as ammonium sulfate react on warming with sodium hydroxide solution as shown in the equation below.



Use this information to describe a simple test, other than smell, to show that ammonia is evolved. State what you would observe.

Test

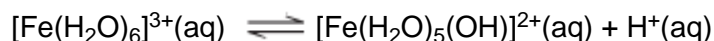
.....

Observation

(2)
(Total 3 marks)

- 6** Iron(II) sulfate is used to kill weeds in garden lawns. It is a by-product of the manufacture of steel. When a lawn is treated with iron(II) sulfate, the iron(II) ions are oxidised to form iron(III) ions.

Iron(III) ions are acidic in aqueous solution as shown by the following equation.



In an experiment, a calibrated pH meter was used to measure the pH of an iron(III) salt in solution. At 20 °C the pH of a 0.100 mol dm⁻³ solution of iron(III) sulfate was found to be 1.62.

- (a) Explain briefly why a pH meter should be calibrated before use.

.....
.....

(1)

- (b) Write an expression for the equilibrium constant, K_a , for the dissociation of iron(III) ions in aqueous solution.

.....
.....

(1)

- (c) Use your answer from part (b) to calculate the value of K_a for this reaction at 20 °C. Give your answer to the appropriate precision. Show your working.

.....
.....
.....
.....
.....
.....

(4)

- (d) Name the substance that is most likely to oxidise the iron(II) ions when iron(II) sulfate is used as a weed killer.

.....

(1)

- (e) Suggest a value for the pH of a 0.100 mol dm⁻³ solution of iron(II) sulfate.

.....

(1)

(Total 8 marks)

7

This question is about the pH of several solutions.

Give all values of pH to 2 decimal places.

- (a) (i) Write an expression for pH.

.....

(1)

- (ii) Calculate the pH of 0.154 mol dm⁻³ hydrochloric acid.

.....

.....

(1)

- (iii) Calculate the pH of the solution formed when 10.0 cm³ of 0.154 mol dm⁻³ hydrochloric acid are added to 990 cm³ of water.

.....

.....

.....

.....

(2)

- (b) The acid dissociation constant, K_a , for the weak acid HX has the value $4.83 \times 10^{-5} \text{ mol dm}^{-3}$ at 25°C .
A solution of HX has a pH of 2.48

Calculate the concentration of HX in the solution.

.....

.....

.....

.....

.....

.....

(4)

- (c) Explain why the pH of an acidic buffer solution remains almost constant despite the addition of a small amount of sodium hydroxide.

.....

.....

.....

.....

.....

.....

(2)

- (d) The acid dissociation constant, K_a , for the weak acid HY has the value $1.35 \times 10^{-5} \text{ mol dm}^{-3}$ at 25°C .

A buffer solution was prepared by dissolving 0.0236 mol of the salt NaY in 50.0 cm^3 of a $0.428 \text{ mol dm}^{-3}$ solution of the weak acid HY

- (i) Calculate the pH of this buffer solution.

.....

.....

.....

.....

.....

.....

.....

.....

.....

.....

.....

(4)

- (ii) A 5.00×10^{-4} mol sample of sodium hydroxide was added to this buffer solution.

Calculate the pH of the buffer solution after the sodium hydroxide was added.

.....

.....

.....

.....

.....

.....

.....

.....

.....

.....

.....

(4)
(Total 18 marks)

8

In this question, give all values of pH to two decimal places.

Calculating the pH of aqueous solutions can involve the use of equilibrium constants such as K_w and K_a

K_w is the ionic product of water. The value of K_w is $5.48 \times 10^{-14} \text{ mol}^2 \text{ dm}^{-6}$ at 50°C .

- (a) (i) Write an expression for pH.

.....

(1)

- (ii) Write an expression for K_w

.....

(1)

- (b) (i) Calculate the pH of pure water at 50°C .

.....

.....

.....

(2)

(ii) Suggest why this pure water is **not** acidic.

.....
.....

(1)

(iii) Calculate the pH of $0.140 \text{ mol dm}^{-3}$ aqueous sodium hydroxide at $50 \text{ }^\circ\text{C}$.

.....
.....
.....
.....
.....

(3)

(c) Calculate the pH of the solution formed when 25.0 cm^3 of $0.150 \text{ mol dm}^{-3}$ aqueous sulfuric acid are added to 30.0 cm^3 of $0.200 \text{ mol dm}^{-3}$ aqueous potassium hydroxide at $25 \text{ }^\circ\text{C}$. Assume that the sulfuric acid is fully dissociated.

.....
.....
.....
.....
.....
.....
.....
.....
.....
.....
.....

(6)
(Total 14 marks)

9

Ethanoic acid is manufactured in industry from methanol and carbon monoxide in a multi-step process involving hydrogen iodide. Ethanoic acid is obtained from the reaction mixture by fractional distillation. Methanoic acid is a useful by-product of this process.


The K_a value of an organic acid can be determined by using the pH curve obtained when the acid is titrated against sodium hydroxide. The pH of the solution formed when exactly half of the acid has been neutralised is equal to the pK_a value of the acid. The K_a value of the acid can be used to confirm its identity.

A chemist used a pH curve to determine the pK_a value of acid Y, formed during the manufacture of ethanoic acid. The chemist transferred 25.0 cm³ of a solution of acid Y into a beaker using a pipette, and measured the pH of the acid solution using a pH meter which could be read to one decimal place. A solution of sodium hydroxide of concentration 0.100 mol dm⁻³ was added from a burette in small portions. The pH of the mixture was recorded after each addition of the sodium hydroxide solution. The chemist's results are given in the table below.

Volume of sodium hydroxide solution added / cm ³	pH
0.0	3.0
2.0	3.4
4.0	3.5
8.0	3.7
12.0	4.3
16.0	4.1
20.0	4.3
22.0	4.7

Volume of sodium hydroxide solution added / cm ³	pH
23.5	5.1
24.0	5.5
24.5	11.8
25.0	12.1
26.0	12.3
27.0	12.4
28.0	12.5
30.0	12.5

- (a) Use the results given in the table above to plot a graph of pH (y-axis) against volume of sodium hydroxide solution added. Use the points to draw the pH curve, ignoring any anomalous results.



(6)

(b) Use your graph from part (a) to determine the

(i) volume of sodium hydroxide solution at the end-point of the titration

..... cm³

(ii) volume of sodium hydroxide solution needed to neutralise half the acid

..... cm³

(iii) pH of the half-neutralised mixture. Give your answer to one decimal place.

.....

(3)

(c) Use the pH of the half-neutralised mixture from part (b) (iii) to calculate the value of the acid dissociation constant, K_a , of the acid **Y**. Show your working.

.....
.....
.....
.....

(2)

(d) The table below shows the K_a values for some organic acids.

Acid	$K_a / \text{mol dm}^{-3}$
Methanoic acid	1.6×10^{-4}
Ethanoic acid	1.7×10^{-5}
Iodoethanoic acid	6.8×10^{-4}
Propanoic acid	1.3×10^{-5}

Use your answer from part (c) to identify acid **Y** from this table.

.....

(1)

- (e) For the pipette and the burette, the maximum total errors are shown below. These errors take into account multiple measurements.

pipette	$\pm 0.05 \text{ cm}^3$
burette	$\pm 0.15 \text{ cm}^3$

Estimate the percentage error in using each of these pieces of apparatus. You should use your answer to part (b) (i) to estimate the percentage error in using the burette.

.....
.....
.....

(1)

- (f) Calculate the difference between the K_a value from part (c) and the K_a value of the acid you identified as the acid **Y** in the table in part (d).

Express this difference as a percentage of the value given in the table in part (d). (If you could not complete the calculation in part (c), you should assume that the K_a value determined from the graph is $1.9 \times 10^{-4} \text{ mol dm}^{-3}$. This is not the correct value.)

.....
.....

(1)

- (g) Other than by using a different pH meter, state **one** way in which the accuracy of the pH readings could be improved.

.....
.....

(1)

- (h) State why there was little change in the pH value of the mixture when between 8 cm^3 and 20 cm^3 of alkali were added.

.....

(1)

(Total 16 marks)